

1. Identify the herbs and put a tick (✓) on the picture which are given below:



a) China rose



b) Mint



c) Money plant

2. Identify the shrub and put a tick (✓) on the picture which are given below:



a) Sunflower



b) Grass



c) Mango tree

3. Identify the creeper and put a tick (✓) on the picture which are given below:



a) Money plant



b) Chili







c) Pumpkin

4. Identify the climber and put a tick (✓) on the picture which are given below:

 <p>a) Coriander</p>	 <p>b) Money plant</p>	 <p>c) Banana</p>
---	---	--

5. Chose the correct name of the plant from the box and write it down under the picture:

 <p>a)</p>	 <p>b)</p>
 <p>c)</p>	 <p>d)</p>

rose	banana	money plant	pumpkin
------	--------	-------------	---------

Prepared by: Quamrun Nahar Rakhi,

e-mail: qnrakhi@gmail.com